

MAHARSHI PATANJALI VIDYA MANDIR



HOLIDAY HOMEWORK

CLASS - III

SUMMER



SUBJECT-ENGLISH

Rewrite these group of words as sentences. Begin the sentence with a capital letter and end it with a full stop.

1. ram is a boy _____

2. it is picture a beautiful _____

3. the baby soundly sleeping was

4. have books two I _____

5. playing are the boys _____

6. in sun shines the sky the _____

7. are of proud we country our

8. the barking dog is _____

9. my beautiful is dress _____

10. long a has cow a tail _____

Underline the nouns in the following sentences and write them in proper columns:

1. He forgot the keys of the car in the office.
2. Some children from an African country visited our school today.
3. We should brush our teeth for three minutes.
4. Many mangoes were growing on the tree.
5. Some Indian cities are very crowded.

Sentence no.

One

More than one

1

2

3

4

5

Learn question answer, new words & word meaning of chapter 1 and 2

Learn the poem 'My Big Fat Cat'

Read the story book 'The Postman' by R K Murthi and paste the pictures of the animals who applied for the post of a 'Postman' mentioning why were they not selected for

House of Commons

Write any five common nouns that you find in the places mentioned below.

School



students

teacher




Garden

Market



Movie theatre



SUBJECT- HINDI worksheet1

संज्ञा (Noun)

चित्र को देखकर संज्ञा शब्दों को सही श्रेणियों में लिखिए।

Look at the picture and write the noun words into the correct categories.



गेंद



मेज़



समुद्र तट



अध्यापिका




एयरपोर्ट



पुस्तकें



चिकित्सक



घोड़ा



बंदर



गायक



बिल्ली



खेत

व्यक्ति

वस्तु

स्थान

जानवर

SUBJECT - MATHS

Try these 4 digit column addition calculations

$$\begin{array}{r} 1) \quad 4216 \\ + 6175 \\ \hline \end{array}$$

$$\begin{array}{r} 2) \quad 6725 \\ + 3418 \\ \hline \end{array}$$

$$\begin{array}{r} 3) \quad 3843 \\ + 6509 \\ \hline \end{array}$$

$$\begin{array}{r} 4) \quad 6277 \\ + 5925 \\ \hline \end{array}$$

$$\begin{array}{r} 5) \quad 7063 \\ + 4695 \\ \hline \end{array}$$

$$\begin{array}{r} 6) \quad 5738 \\ + 857 \\ \hline \end{array}$$

$$\begin{array}{r} 7) \quad 2856 \\ + 8607 \\ \hline \end{array}$$

$$\begin{array}{r} 8) \quad 5168 \\ + 6507 \\ \hline \end{array}$$

$$\begin{array}{r} 9) \quad 4989 \\ + 682 \\ \hline \end{array}$$

$$\begin{array}{r} 10) \quad 3769 \\ + 8547 \\ \hline \end{array}$$


$$\begin{array}{r} 11) \quad 6947 \\ + 3765 \\ \hline \end{array}$$

$$\begin{array}{r} 12) \quad 8905 \\ + 3174 \\ \hline \end{array}$$

$$\begin{array}{r} 13) \quad 5163 \\ + 638 \\ + 4209 \\ \hline \end{array}$$

$$\begin{array}{r} 14) \quad 7218 \\ + 5706 \\ + 846 \\ \hline \end{array}$$

$$\begin{array}{r} 15) \quad 6905 \\ + 3625 \\ + 5268 \\ \hline \end{array}$$



Write these numbers in figures. The first one is done for you.

three hundred sixty-seven	367
four hundred twelve	
eight hundred seventy-five	
one hundred fifty-eight	
seven hundred sixteen	
five hundred one	
two hundred forty-two	
nine hundred twenty-four	
one hundred seven	
four hundred ninety-eight	
three hundred sixty-two	
six hundred three	
eight hundred fifty-nine	



Which is the biggest number in the table? _____

Can you find a number between 400 and 500? _____

SUBJECT - EVS

Q4. Match the following correctly.



Used for hunting and fishing

Earliest homes of early man


Used for storing grains

Biggest discovery

Most useful tool






Living And Non-living Things

Circle the odd one in each group based on whether they are living or non-living.






SUBJECT - COMPUTER

1. Complete the table:

	Name of the device	Input/Output
	_____	_____
	_____	_____
	_____	_____
	_____	_____
	_____	_____

Worksheet 2

Write 'I' for input, 'O' for Output and 'P' For processing in following



10, 14

$10+14$

$10+14=24$