



MAHARISHI PATANJALI VIDYA MANDIR


HOLIDAY HOMEWORK

CLASS-3

SUBJECT-ENGLISH

- Learn question answers, new words & word meaning of Ch-1 and 2
- Learn the poem 'Wandering Singers'.
- Complete page no. 5 to 20 in your Cursive writing book.
- Summer story reading: 'My Father's Dragon' by Ruth Stiles Gannett.

Write the antonyms of the following words:



Up



Hot



Happy



Stop



Full




Sink



Short



Big



Rewrite these group of words as sentences. Begin the sentences with a capital letter and end it with a full stop.

1. ram the is a boy

2. it is picture a beautiful

3. the baby soundly sleeping was

4. have books two I


5. playing are the boys

6. is sun shines the sky the

7. are of proud we country our

8. the barking dog is

Look at the picture and answer the following questions.



1. What is the weather in this picture? _____
2. How many puddles can you count? _____
3. What colour is the boy's umbrella? _____
4. Who is hiding under a leaf? _____
5. what is one red and yellow umbrella? _____
6. What is the girl in the yellow coat doing? _____
7. Write the opening sentences of a story based on this picture. _____

HINDI

1] टोली बनाकर खेले जानेवाले खेलों को सही नामों से जोड़ें :

फुटबॉल



क्रिकेट



कबड्डी



हॉकी



रस्साकशी



12


ACTIVITY -1 दी गई वर्ग पहेली में तीन अक्षर वाले पच्चीस शब्द छिपे हैं, शब्दों को खोजकर कॉपी में लिखना है ध्यान रहे शब्द सार्थक हों |(HINDI LIT.BOOK PAGE NO.130)PASTE THE PICTURE OF THIS ACTIVITY AND WRITE IT THE SAME PAGE.

A decorative border surrounds the page, featuring a repeating pattern of colorful geometric shapes (triangles, squares, circles) and tools (pencils, pens, markers) in shades of blue, pink, purple, yellow, and green.

EVS

WORKSHEET 1

1. Collect pictures of various tools used by early humans and paste it.

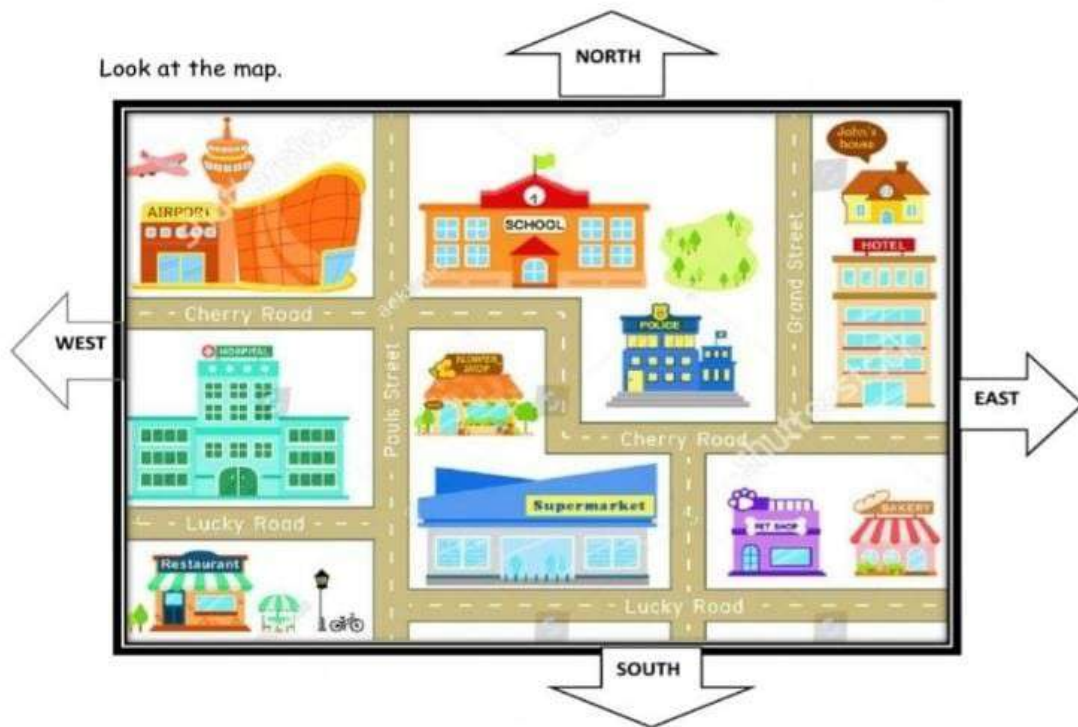


[illegible][illegible]

WORKSHEET 3

CARDINAL DIRECTIONS

Look at the map.



1. What is North of the Restaurant?

SUPERMARKET

HOSPITAL

2. What is West of the Police station?

FLOWER SHOP

HOTEL

3. What is East of the Pet shop?

BAKERY

SUPERMARKET

4. What is South of the Airport?

SCHOOL

HOSPITAL

5. What is South of the Flower shop?

POLICE STATION

SUPERMARKET

6. What is west of the School?

AIRPORT

PET SHOP

7. What is East of the Hospital?

RESTAURANT

FLOWER SHOP

8. What is North of the Hotel?

BAKERY

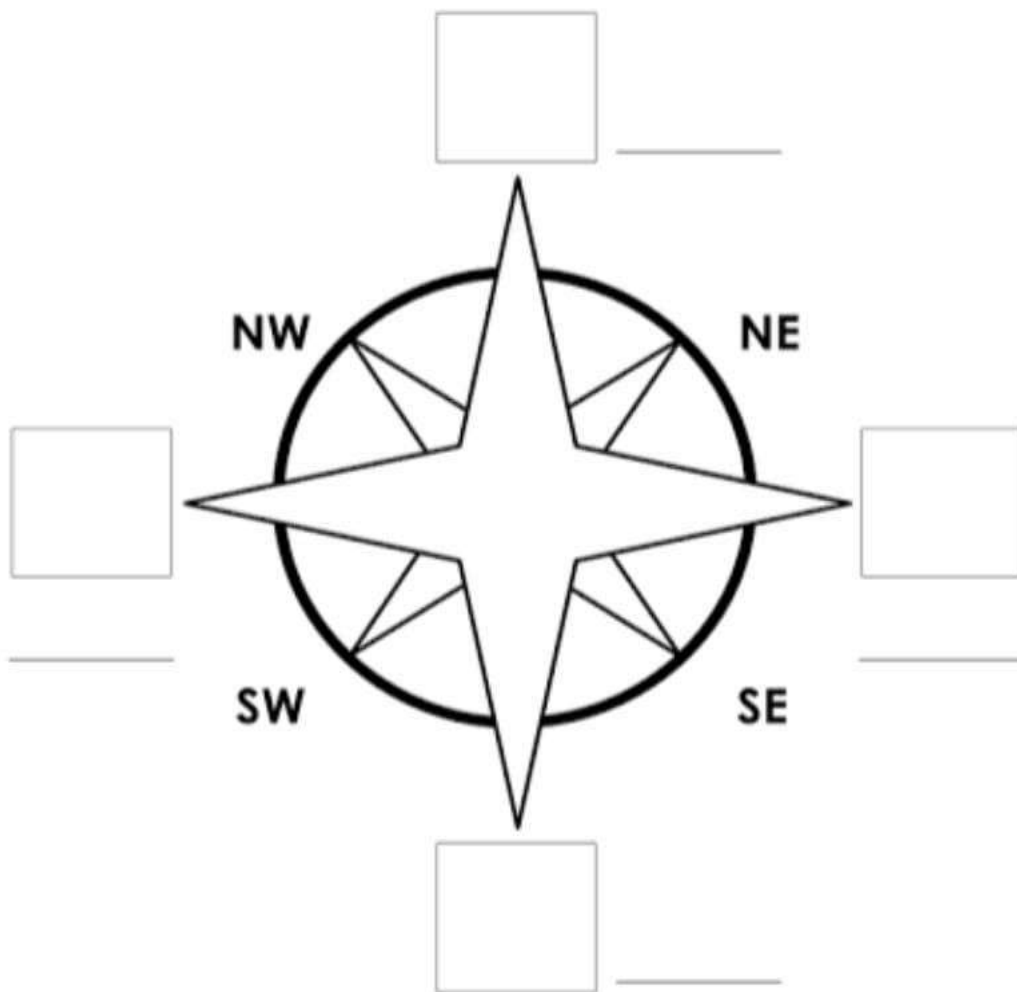
JOHN'S HOUSE

WORKSHEET 4

Name: _____ Date: _____

The Compass Rose

Colour the compass then cut the labels and paste them.

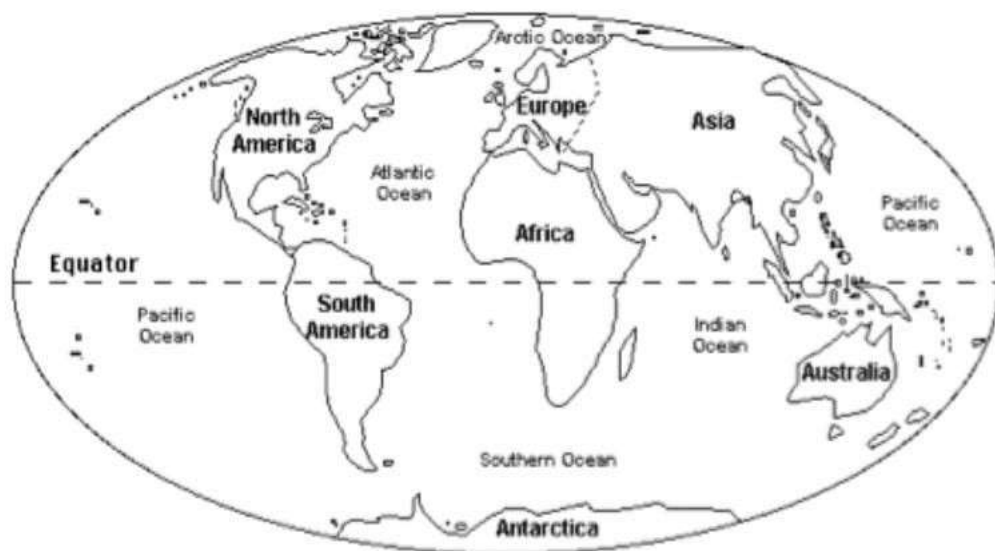


E	W	S	N	East	North
				West	South

WORKSHEET 5

Follow the instructions below.

Name _____



1. Color the continent of Africa green.
2. Color the continent of Antarctica white.
3. Color the continent of Asia yellow.
4. Color the continent of Europe red.
5. Color the continent of Australia brown.
6. Color the continent of North America orange.
7. Color the continent of South America pink.
8. How many continents are there? _____
9. Color the equator (a line) black.
10. Color the oceans blue.
11. I live on the continent of _____

MATHEMATICS

Worksheet 1

Solve the following problems.

1. Write the standard form, word form and expanded form of -

- a. 5131
- b. 4667
- c. 2 thousands 3 hundreds 50 tens 5 ones

2. Write the Roman numerals for the numbers 1 to 49.

3. Write the successor.

- a. 999
- b. 253
- c. 1098
- d. 8999

4. Write the predecessor.

- a. 9011
- b. 1000
- c. 5163
- d. 96

5. Find the place value of all the digits in the given numbers.

a.

Th	H	T	O
4	0	0	4

b.

Th	H	T	O
6	9	8	4

WORKSHEET 2

1. Read the number. What is the place value of the underlined digit?

a 4821 b 3261 c 3827

d 5637 e 8409 f 2064

g 3956 h 3749 i 2690

2. Write in expanded form.

a 7824 = _____

b 3549 = _____

c 6042 = _____

d 8050 = _____

e 5097 = _____

f 4230 = _____

g 9371 = _____

WORKSHEET 3

Find the sum.

$$\begin{array}{r} \text{H T O} \\ 4 \ 8 \ 1 \\ + 2 \ 2 \ 3 \\ + 1 \ 3 \ 4 \\ \hline \end{array}$$

$$\begin{array}{r} \text{H T O} \\ 8 \ 5 \ 2 \\ + 1 \ 0 \ 3 \\ + 1 \ 0 \ 6 \\ \hline \end{array}$$

$$\begin{array}{r} \text{H T O} \\ 7 \ 5 \ 9 \\ + 1 \ 5 \ 2 \\ + 3 \ 0 \ 3 \\ \hline \end{array}$$

$$\begin{array}{r} \text{H T O} \\ 8 \ 4 \ 8 \\ + 4 \ 9 \ 3 \\ + 6 \ 3 \ 5 \\ \hline \end{array}$$

$$\begin{array}{r} \text{H T O} \\ 9 \ 6 \ 3 \\ + 7 \ 7 \ 4 \\ + 2 \ 0 \ 8 \\ \hline \end{array}$$

$$\begin{array}{r} \text{H T O} \\ 5 \ 5 \ 5 \\ + 4 \ 0 \ 8 \\ + 5 \ 4 \ 9 \\ \hline \end{array}$$

$$\begin{array}{r} \text{H T O} \\ 3 \ 2 \ 9 \\ + 2 \ 3 \ 5 \\ + 3 \ 8 \ 9 \\ \hline \end{array}$$

$$\begin{array}{r} \text{H T O} \\ 9 \ 2 \ 1 \\ + 8 \ 1 \ 2 \\ + 3 \ 3 \ 3 \\ \hline \end{array}$$

$$\begin{array}{r} \text{H T O} \\ 7 \ 2 \ 1 \\ + 2 \ 2 \ 3 \\ + 1 \ 2 \ 9 \\ \hline \end{array}$$

$$\begin{array}{r} \text{H T O} \\ 9 \ 9 \ 8 \\ + 2 \ 3 \ 3 \\ + 4 \ 3 \ 4 \\ \hline \end{array}$$

$$\begin{array}{r} \text{H T O} \\ 6 \ 2 \ 4 \\ + 9 \ 1 \ 3 \\ + 1 \ 1 \ 1 \\ \hline \end{array}$$

$$\begin{array}{r} \text{H T O} \\ 5 \ 3 \ 2 \\ + 4 \ 4 \ 4 \\ + 4 \ 0 \ 7 \\ \hline \end{array}$$

Worksheet 4

Fill in the blanks :

$$8000 = 8 \times \underline{\quad} = 80 \times \underline{\quad} = 800 \times \underline{\quad}$$

$$3600 = \underline{\quad} \times 100 = \underline{\quad} \times 360 = 60 \times \underline{\quad}$$

$$720 = 10 \times \underline{\quad} = 8 \times \underline{\quad} = \underline{\quad} \times 12$$

$$900 = \underline{\quad} \times 9 = \underline{\quad} \times 30 = \underline{\quad} \times 12$$

$$2100 = 21 \times \underline{\quad} = \underline{\quad} \times 30 = \underline{\quad} \times 90$$

$$9 \times 200 = \underline{\quad} = \underline{\quad} \times 7 = \underline{\quad} \times 10$$

Fill in the blanks :

$$15 \times \underline{\quad} = 0$$

$$13 \times 1 = \underline{\quad}$$

$$26 \times 0 = \underline{\quad}$$

$$3 \times 3 = \underline{\quad}$$

$$8 \times 17 = \underline{\quad}$$

—WORKSHEET 5

Column Subtraction



Solve the equations.

$$\begin{array}{r} 1. \quad 91 \\ - 54 \\ \hline \end{array}$$

$$\begin{array}{r} 2. \quad 78 \\ - 35 \\ \hline \end{array}$$

$$\begin{array}{r} 3. \quad 55 \\ - 45 \\ \hline \end{array}$$

$$\begin{array}{r} 4. \quad 78 \\ - 43 \\ \hline \end{array}$$

$$\begin{array}{r} 5. \quad 92 \\ - 39 \\ \hline \end{array}$$

$$\begin{array}{r} 6. \quad 47 \\ - 31 \\ \hline \end{array}$$

$$\begin{array}{r} 7. \quad 81 \\ - 66 \\ \hline \end{array}$$

$$\begin{array}{r} 8. \quad 60 \\ - 29 \\ \hline \end{array}$$

$$\begin{array}{r} 9. \quad 354 \\ - 250 \\ \hline \end{array}$$

$$\begin{array}{r} 10. \quad 240 \\ - 136 \\ \hline \end{array}$$

$$\begin{array}{r} 11. \quad 750 \\ - 549 \\ \hline \end{array}$$

$$\begin{array}{r} 12. \quad 340 \\ - 210 \\ \hline \end{array}$$



COMPUTER

Computer Worksheet1

Q1. Tick (✓) the correct options.

1. Which of the following is not an input device?

a. CPU () b. joystick () c. light pen ()

2. The games you play on a computer are examples of hardware.

a. hardware () b. system software () c. application software ()

3. Which of the following controls the overall activities of a computer?

a. notepad () b. operating system () c. paint ()

4. Which of the following is an operating system?

a. notepad () b. Tux Paint () c. windows ()

5. Which of the following part of CPU performs calculations?

a. ALU () b. CU () c. both a and b ()

Computer Worksheet2

Q2. Fill in the missing blanks



S	C				L	S
---	---	--	--	--	---	---



H		M	
---	--	---	--



3.

H		S			T			S
---	--	---	--	--	---	--	--	---



4.

B		N		S
---	--	---	--	---



Computer Worksheet3

Q1. State 'True' or 'False'.

- 1. A webcam is an input device.**
- 2. Android is an application software.**
- 3. The CU is a part of CPU.**
- 4. A CD or DVD comes in a circular shape.**
- 5. A hard disk stores data permanently.**

Computer Worksheet 4

Q1. Identify the places and label them.




.....



.....



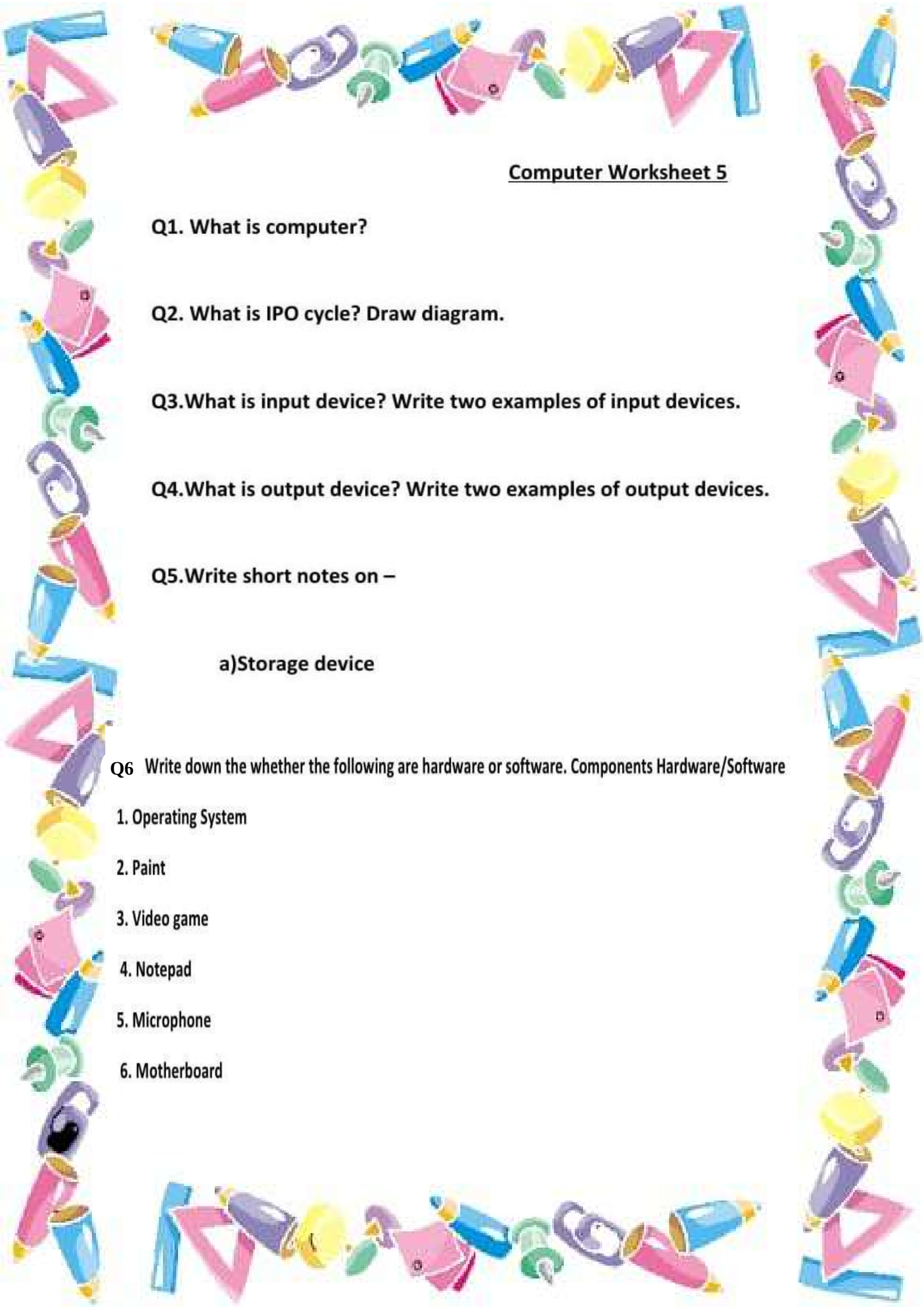
.....



.....



.....



Computer Worksheet 5

Q1. What is computer?

Q2. What is IPO cycle? Draw diagram.

Q3. What is input device? Write two examples of input devices.

Q4. What is output device? Write two examples of output devices.

Q5. Write short notes on –

a) Storage device

Q6 Write down the whether the following are hardware or software. Components Hardware/Software

1. Operating System
2. Paint
3. Video game
4. Notepad
5. Microphone
6. Motherboard