

Enjoy
SUMMER
have fun



MAHARSHI PATANJALI VIDYA MANDIR



Holiday Homework
Class-4

SUBJECT-ENGLISH

Worksheet – 1

Write a proper nouns for the given common nouns

1. woman → _____
2. man → _____
3. mountain → _____
4. book → _____
5. movie → _____
6. monument → _____
7. holiday → _____
8. singer → _____
9. school → _____
10. country → _____



11. day → _____
12. teacher → _____
13. city → _____
14. month → _____
15. university → _____
16. restaurant → _____
17. company → _____
18. hotel → _____
19. planet → _____
20. actor → _____

Worksheet -2

Look at the pictures and observe what each one does. Complete the sentence with the correct Being Verbs as well as a suitable form of the verb.



1. My mother _____ a doctor. She _____ after her patients.

2. They _____ my teachers. They _____ me in my studies.



3. Sneha _____ a cook. She _____ tasty food.

4. Sudha _____ a painter. She _____ very well.



5. I _____ an author. I _____ written many books.

6. They all _____ cricketers. They play very well.



7. They _____ our security guards. They will take _____ of our house.

8. I _____ a drummer. I _____ to play drums.




Paragraph writing

OPINION WRITING

Would you rather explore the moon or the ocean?

moon



or

ocean



Four sets of horizontal writing lines for a paragraph. Each set consists of a solid top line, a dashed middle line, and a solid bottom line.

Worksheet -4

Look at the picture and write a paragraph in 50-60 words.



Read the story book 'The Adventure of Tom Sawyer' by Mark Twain and complete the activity given below.

<p>TOM SAWYER</p>	<p>HUCKLEBERRY FINN</p>	<p>BECKY THATCHER</p>
 <p>Character Traits:</p> <p>What challenges does this character face?</p> <p>How does this character change over time?</p>	 <p>Character Traits:</p> <p>How does this character interact with the main character?</p> <p>What is the narrator's attitude toward this character?</p>	 <p>Character Traits:</p> <p>How does this character interact with the main character?</p> <p>What is the narrator's attitude toward this character?</p>
<p>SID SAWYER</p>	<p>AUNT POLLY</p>	<p>JOE HARPER</p>
 <p>Character Traits:</p> <p>How does this character interact with the main character?</p> <p>What is the narrator's attitude toward this character?</p>	 <p>Character Traits:</p> <p>How does this character interact with the main character?</p> <p>What is the narrator's attitude toward this character?</p>	 <p>Character Traits:</p> <p>How does this character interact with the main character?</p> <p>What is the narrator's attitude toward this character?</p>
<p>INIUN JOE</p>	<p>MUFF POTTER</p>	<p>MR. DOBBINS</p>
 <p>Character Traits:</p> <p>How does this character interact with the main character?</p> <p>What is the narrator's attitude toward this character?</p>	 <p>Character Traits:</p> <p>How does this character interact with the main character?</p> <p>What is the narrator's attitude toward this character?</p>	 <p>Character Traits:</p> <p>How does this character interact with the main character?</p> <p>What is the narrator's attitude toward this character?</p>



Create your own at [Storyboard That](https://www.storyboardthat.com)

Hindi

Worksheet 1

आओखेलेंखेल

दिए गए चित्रों में अंतर बताओ और लिखो



कहानी लेखन


चित्र को ध्यान से देखकर कहानी को क्रम से लिखो-

कुत्ता उससे दूसरा कुत्ता समझकर भौंकने लगा रोटी नदी में गिर गई रास्ते में एक कुत्ता जा रहा था ।
तभी उससे रोटी मिल गयी । वह रोटी लेकर नदी पार जा रहा था उससे परछाई दिखाई दी
। वह दूसरा कुत्ता समझकर भौंकने लगा ।

.....

.....

.....



Worksheet 2

वाक्यविचार

निम्नलिखित वाक्यों में उद्देश्य और विधेय बताओ

1. कोमल अपना काम स्वयं करती है।

--	--

2. मेघ शीतलजल देता है।

--	--

3. अर्पित सबकी मदद करता है।

--	--

4. चाची जीने भोजन बनाया।

--	--

5. भारत में सब एक समान हैं।

--	--

6. गंगा एक पवित्र नदी है।

--	--

Worksheet 3

भारत में पाए जाने वाले मसालों की सूची तैयार करके नाम लिखो चित्र बनाओ या चिपकाओ-

--	--	--

Worksheet 4

इमारते पहचान कर बताओ ये भारत में कहाँ पर स्थित हैं
किसी एक इमारत बारे में विस्तार से लिखो



.....

.....

.....


.....

.....

.....

Maths
Worksheet -1

1. Write the next three numbers in the series



- 2. Find the odd one out:- 3,7,9,12,21,27. _____
- 3. A business man planned to help the poor underprivileged section of the society. He donated 50 lakh 30 thousand to an NGO group. The group spent the whole amount in construction of flats for them . How much money did they spend? Write the answer in International System both in words and numeral. What value of the businessman is depicted here?
- 4. Make a robot by using different geometrical shape
- 5. Write in Roman numbers.
 - a. Your date and year of birth_____.
 - b. How many hours do you spend playing games on mobile._____

Worksheet-2

Make the Bill

Neha bought all toys from the top shelf of the toy shop and Rashi bought all the toys from the bottom shelf. Can you



Rs 7



Rs 18



Rs 12



Rs 40



Rs 35



Rs 20



Rs 25



Rs 14

make a bill for them ?

Neha's bill

Items	Amount
<input type="text"/>	<input type="text"/>
<input type="text"/>	<input type="text"/>
<input type="text"/>	<input type="text"/>
<input type="text"/>	<input type="text"/>
<input type="text"/>	<input type="text"/>
Total	<input type="text"/>

Rashi's bill

Items	Amount
<input type="text"/>	<input type="text"/>
<input type="text"/>	<input type="text"/>
<input type="text"/>	<input type="text"/>
<input type="text"/>	<input type="text"/>
<input type="text"/>	<input type="text"/>
Total	<input type="text"/>

WORKSHEET -3

MATHEMATICS IS THE MOST BEAUTIFUL CREATION OF THE HUMAN SPIRIT



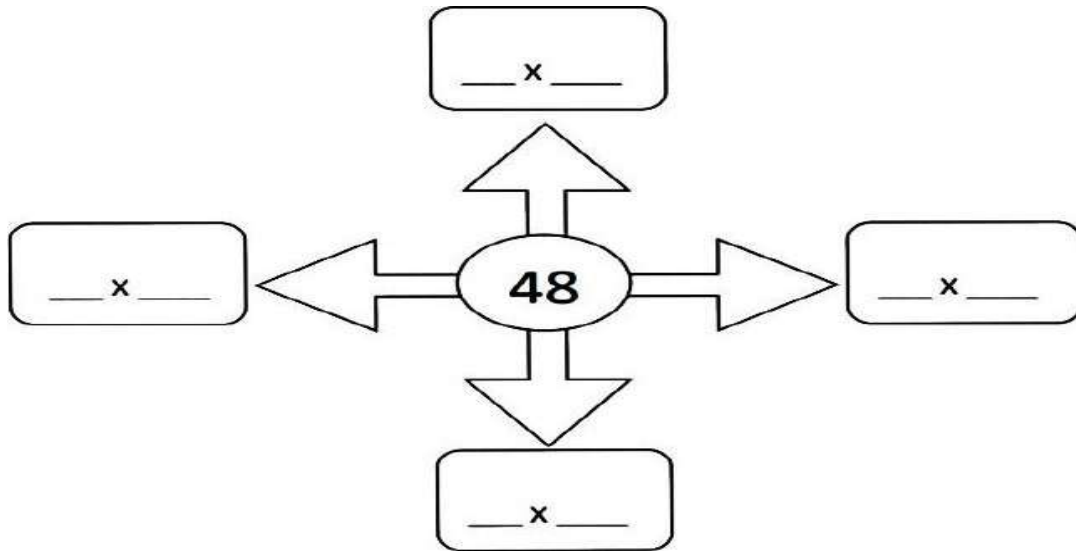
Q1. Being a mathematician is hard. Only a few people have mastered this subject and achieved fame. Read about some famous Indian mathematicians. Choose any one and write in brief his/her contribution to Mathematics in around 50 words.

Q2. Take the last 5 digits of your father's/mother's mobile number.

i. Rearrange the digits to form the largest 5-digit number.

ii. Rearrange the digits to form the smallest 5-digit number.

Q3. Write different ways to find the product given in the centre.



WORKSHEET -4

Q-1 Its a race of snails.....Woahhaa!The distance from startline can be seen on the scale below. Answer some of the questions given in the yellow box to help the judge

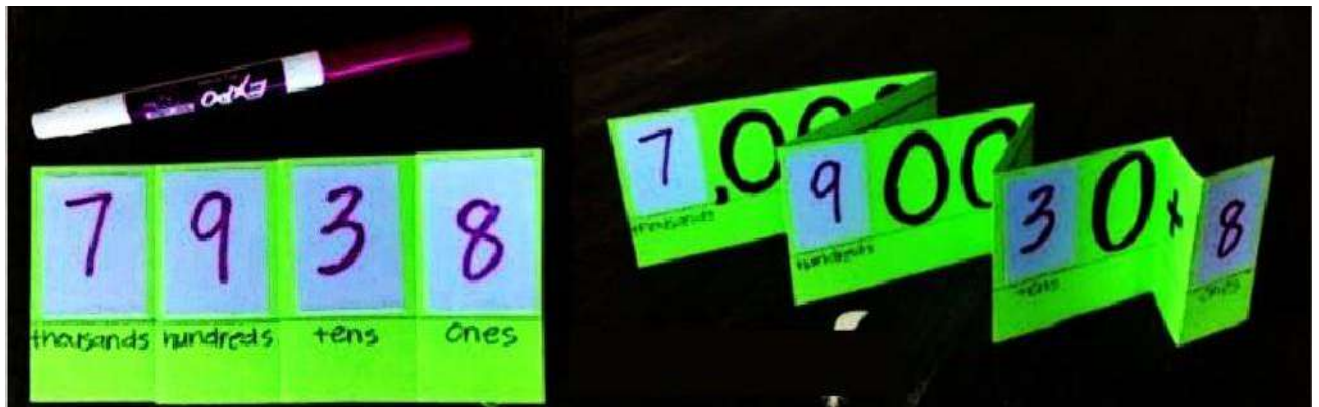
Can you find out?

1. How far ahead is snail 1 from 2?
.....
2. How far is snail 3 from start line?
.....
3. How much distance will snail 4 have to cover to reach 10 cm mark?
.....
4. How far ahead is snail 2 from 3?
.....

2 Magic Square Draw a 3 x 3 magic square such that sum of each row, each column and each diagonal is 15.

Place Value Foldable

Take any four 5-digit numbers and make a place value foldable. Refer to the picture below.



ENVIRONMENTAL STUDIES

Worksheet-1

1. A dumping truck visits your area and goes door to door everyday .It collects the garbage and dumpsit at a dumping site.



a. As responsible citizens what is your responsibility when the dump truck comes to your door?

b. What is the use of green and blue basket?

c. What is Swachh Bharatt Abhiyan?

2.a. During break time you might have seen students throwing eatables here and there in the ground. Do you think littering around in your school campus is appreciable?

b. What steps you will take to keep the school campus clean?

3. During the summer break you feel hot and switch on the AC and enjoy the cool summer in your bedroom but after some time you go out to play leaving the AC and fan on .

a. Is it a good habit?

b. What steps should you take to save energy ?

c. What is shown in the picture below?



d. Is it a source of energy? _____

e. How does it help us? _____

EAT
HEALTHY
BE
Healthy

WORKSHEET -2

I. In the fast changing world our food habits have changed from taking traditional healthy diet to junk fast food.

1. Is fast food good for our health? _____

2. Make a healthy diet chart for the summer break .(Add a n extra sheet for the chart)



3. Which component of food is shown in the above picture? _____.

4. What is the function of the given component? _____

II. Rakesh is loves to eat fast foods like burger ,chowmein, potato chips ,chocolates ,pizza. He spends his free time playing his favourite games on his mobile phone. His body weight is 85 kg.He is not able to run and play around with his friend freely.



a. Is he taking the right diet? _____

b. What is the cause of his bulky body? _____

c. What is the right diet you should take to reduce obesity? _____


d. Is playing game and watching reels on mobile a good habit? _____

EVS WORKSHEET -3

Q-1 Divide if each situation will hurt or help our Earth.

We heal our Earth by		We hurt our Earth by	
DONATE TOYS	PLANT TREES	DUMP WASTE INTO THE OCEAN	DRINK FROM REUSABLE BOTTLE
TAKE SHORTER SHOWER	PICK UP TRASH AT PARK	POUR CHEMICALS INTO THE RIVER	LEAVE THE LIGHTS ON WHEN YOU LEAVE YOUR HOUSE.
LEAVE THE WATER RUNNING WHILE WASHING CLOTHES	RECYCLE CANS AND BOTTLES	DRIVE TO THE STORE INSTEAD OF WALK	THROW TRASH OUT OF THE WINDOW

Q-2 List few things you can do to heal the planet:



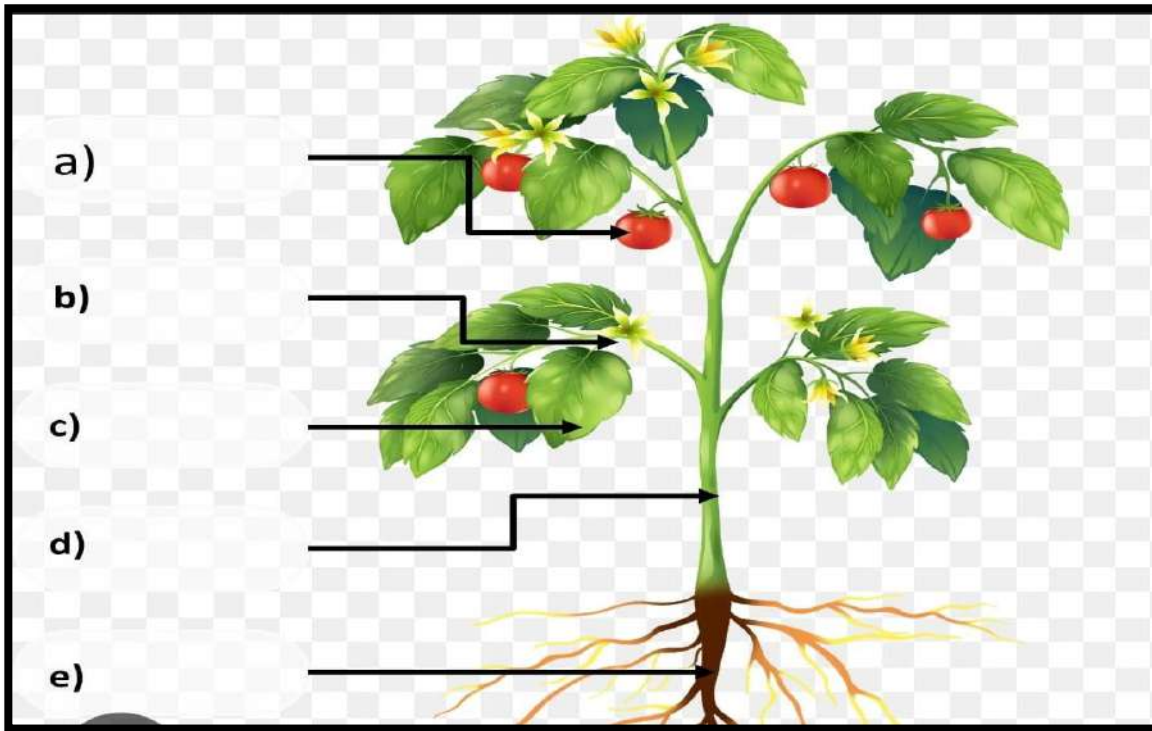
Things
I Can Do To Heal The Planet EARTH



Worksheet -4

1. Living beings are _____ and _____
2. The seeds germinate and develop into _____
3. Living beings move from one place to another. _____
4. The flowers produce _____
5. Plants produce _____ during photosynthesis

6. Label the parts of the given plant



RESEARCH TIME

Activity:-

Put a leaf under a white sheet of paper. Hold it, hold the pencil tip sideways and rub on it. You will get an impression of the leaf.

Computer

Worksheet-1

Word Search Puzzle Computer Parts



Pendrive



Scanner



Monitor



Cable



Mouse



Laptop



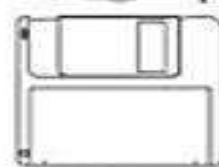
Printer



RAM



Hard Disk

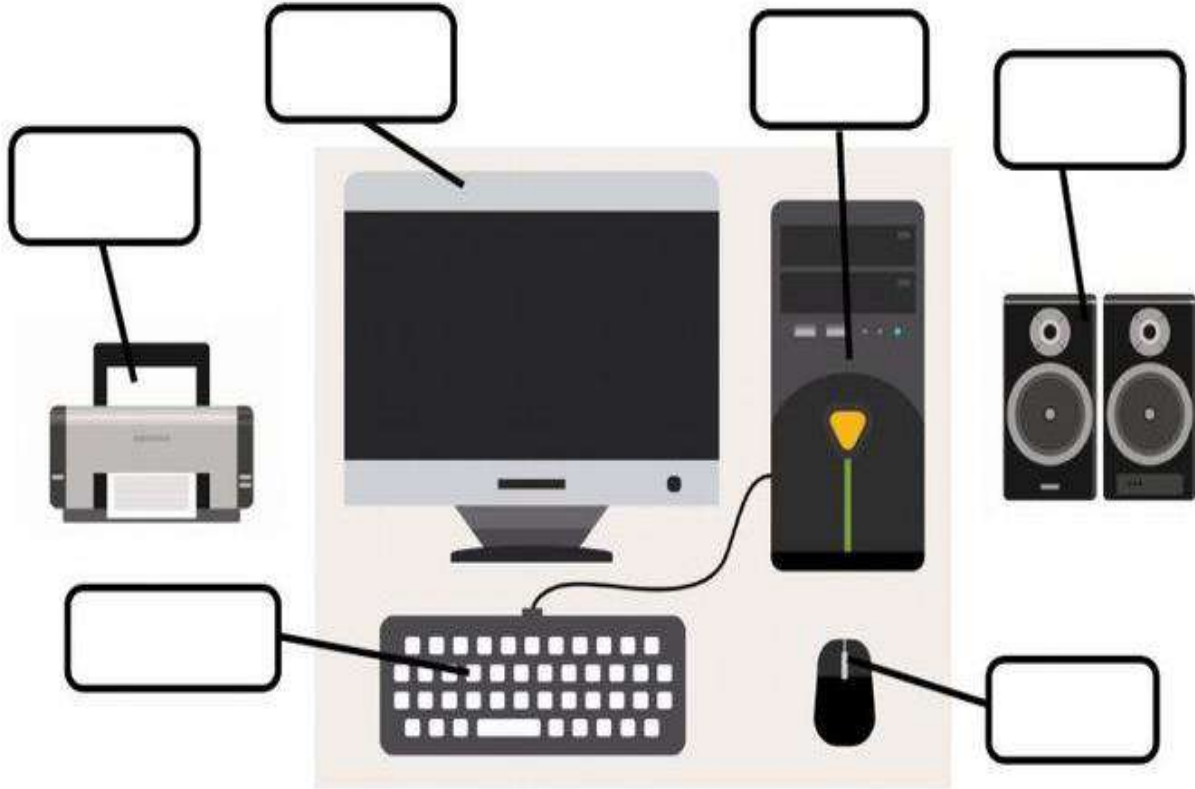


Floppy

Worksheet-2

Identify Computer parts write in correct box.

monitor keyboard speakers printer CPU mouse



Worksheet-3

Write the full form of the following COMPUTER Terms.

RAM _____

ROM _____

CD _____

DVD _____

MB _____

KB _____

GB _____

TB _____

CPU _____

ALU _____

Worksheet- 4

Computer Parts

DIRECTIONS: Match each computer part to its purpose. Then label the diagram with the number of each item.

- | | |
|------------------------------|---|
| _____ 1. keyboard | A an output device that displays information in pictorial or text form |
| _____ 2. CPU/tower | B an input device |
| _____ 3. monitor | C controls the motion of a pointer in two dimensions in a graphical user interface (GUI). |
| _____ 4. mouse | D stores digital information and provides the instructions and processing power the computer needs to do its work |
| _____ 5. external hard drive | E portable device to store digital information |



(संस्कृतकार्य पत्रिका-1)

1. चित्रैः सहनामानिमेलयत—

(क)



(i) औषधम्

(घ)



(ii) ऐरावतः

(ख)



(iii) अश्वः

(ङ)



(iv) आम्रम्

(ग)



(v) उलूकः

(च)



(vi) इक्षुः

2. स्वरोंकोक्रमसेलगाइये--

उ, ऐ, अ, ओ, लृ, ई, औ, ए, आ, ऋ, ऊ, इ

कार्य पत्रिका-2

1. अधोलिखितानाम् अनुवादंकुरुत--

(क) कच्छपः ----- (ख) घटी-----

(ग) टंकः ----- (घ) डोला-----

(ङ) चषकः ----- (च) वर्तकः-----

(छ) रज्जु: ----- (ज) तक्षक:-----

2. निम्नशब्दोंकेअर्थलिखिये--

(क) छत्रम् -----

(ख) झष: -----

(ग) जनक:-----

(घ) चमू: -----

(ङ) डोला -----

(च) फलम् -----

कार्य पत्रिका-3

1. नीचेलिखेशब्दोंकोउनकेअर्थोंसेमिलाइये--

- | | |
|-----------|-------|
| 1. अश्वः | गन्ना |
| 2. इक्षुः | घोड़ा |
| 3. ऊर्णा | उल्लू |
| 4. उलूकः | ऊन |
| 5. ईषीका | ईट |
| 6. ओष्ठः | होंठ |

2. फलों के नाम संस्कृत में लिखो -



3. दिये गये शब्दों के चित्र बनाइये--

छत्रम् ----- ध्वजः -----

झषः ----- हंस -----

नयनम् ----- दन्तः -----

कार्य पत्रिका - 4

1. छः घरेलू पशुओं के नाम---

1. ----- 2. -----
3. ----- 4. -----
5. ----- 6. -----

2. चित्र पहचानकर पक्षियों के नाम संस्कृत में लिखो.



3. मिलान करिए -

1. वर्तकः

2. शंखः

3. वनम्

4. शशकः

श+श+कः

व+न+म्

व+र्त+कः

शं+ख

Class 4

Holiday Homework

English-

- Learn question answers, word meaning, new words of chapter 1 and 2.
- Learn the poem and question answers of 'Show Off' and 'Foreign Lands'.
- Picture composition given on page no. 14

Hindi-

- प्रतिदिन एक पेज सुलेख करने का अभ्यास करेंगे।
- कॉपी में कराया गया सभी कार्य याद करेंगे।
- Project work पेज, न. १६ (साहित्य पुस्तक) में दी गयी वर्ग पहली को फाइल पेपर में करना है।

E.V.S-

- Learn the question and answers of chapters 1,2 and 17
- Collect two different kinds of simple and compound leaf, dry it and paste it on a file paper. Write the name of the plants from which the leaves are collected. (prepare a herbarium)

Maths-

- Practice all the exercises done in the class
- Learn the tables from 2 to 15
- Complete the worksheet given on page 28 in the book

Computer-

- Learn all the exercises and question answers of chapter 1.
- Write an essay on 'My School' by using MS Word Application.

Sanskri-

- कॉपी में कराया गया सभी कार्य याद करेंगे।
- संस्कृत मित्रं, पेज नंबर 33, अभ्यास 3, 4

The story books prescribed for the students who are not attending the camp are -

David Copperfield by Charles Dickens Frank
OR

Tales of Oscar Wilde (Abridged) Oscar Wilde

Students have to read any one of the books.

An assessment of their reading skills from the prescribed books will be held in the last week of July

Students have to read any one of the books.