

Maharshi Patanjali Vidya Mandir



Holiday Homework

Class 3



English Holiday Homework

Worksheet-1

Drag the words to arrange them in alphabetical order.

ABCDEFGHIJKLMNOPQRSTUVWXYZ

1.

elephant



2.

flower



3.

house



4.

car



5.

ice cream



6.

donut



7.

alligator



8.

jellyfish



9.

grapes



10.

butterfly



Write the following words in ABC order on the lines.

11. sugar pepper cinnamon salt _____

12. green blue gold orange _____

13. drum doll paper yoyo _____

14. pencil book sharpener crayon _____

Worksheet -2

- (A) Copy the nouns from the box in the right place.
Remember to use capital letters for proper nouns.

city gopal man pokhara ramayana simran book
tree kathmandu stone ganga nepal monkey country

Common nouns

Proper nouns

- (B) Copy the sentences below. Use capital letters for proper nouns.

1. He lives in a small town named janakpur.

2. He comes from beijing. It is the capital of china.

3. I have a cat. I call him tommy.

4. There is a river near the town. People call it the bagmati.

5. My best friend is hari. He lives in chitwan.

Worksheet- 3


Read the passage and answer the following questions:

Do you like apples? Apples can be red, yellow, or green. Each color tastes different. They are fruit. You can make apples into treats.

Apples grow on trees. They finish growing in the fall. Then you can pick them to eat. When you pick an apple, you twist it and then pull it off the tree.

There are five parts of an apple. The outside is the skin. The inside is the flesh.

There are seeds inside of the apple. The stem is on top. Some apples have leaves by the stem. What else do you know about apples?



1. When do apples finish growing?

Ans. _____

2. What is this passage about?

Ans. _____

3. How many parts does an apple have?

Ans. _____

4. What is something you wonder about apples after reading this passage?

Ans. _____

5. The outside of the apple is called?

Ans. _____

- 1) Imagine you are Tenali Rama. Write a clever plan to catch the thieves.
- 2) Imagine you are the girl who knows everything. How would you use your knowledge to help others.

Hindi

(हिन्दीकार्य पत्रिका-1)

1. चित्रदेखकर कहानी अपने शब्दों में लिखिए –



कार्य पत्रिका-2

1. अंडे देने वाले पशु एवं पक्षी के एक-एक चित्र बनाइये और रंग भी भरिये –

पशु—

पक्षी--

कार्य पत्रिका-3

1. चित्रदेखकरवर्णोंपरसहीमात्रालगाकरशब्दबनाओ –
क.



ककड़

ख.



कबतर

ग.




बग च

घ.



च ड़य

ङ.



कछ़आ

कार्य पत्रिका-4

1. कौनहैराजा, कौनहैरानी? बताइये –

1. पेड़ोंकाराजा_____

2. फलोंकाराजा_____

3. फूलोंकाराजा_____

4. जंगलकाराजा_____

5. पक्षियोंकाराजा_____

6. जलकीरानी_____

7. सुरकीरानी_____

8. ऋतुओंकाराजा_____

Maths



Worksheet 1

Fill in the blanks:

- (a) + 100 + 70 = 2170
- (b) + 800 + 70 + 1 = 2871
- (c) 1000 + 80 + = 1083
- (d) 9000 + 200 + + 2 = 9262
- (e) 3000 + 200 + + 9 = 3249
- (f) + 700 + 5 = 3705
- (g) + 300 + 40 + 1 = 6341
- (h) 6000 + 100 + 70 + = 6171
- (i) 2000 + + 90 = 2290
- (j) 5000 + + 50 = 5550
- (k) 3000 + + 80 + 8 = 3588
- (l) 3000 + 600 + 50 + = 3658
- (m) 6000 + + 4 = 6104
- (n) 3000 + 50 + = 3055

Worksheet 2

Read the question and give the answer:

This table shows the number of different types of fruit sold in a market for the first 3 days of the week.	Fruit Sales	Apples 	Oranges 	Bananas 
	Monday	4,326	5,148	3,189
	Tuesday	2,265	3,976	5,146
	Wednesday	978	1,064	2,703

a) How many apples were sold on Monday and Tuesday?

b) How many oranges were sold on Tuesday and Wednesday?

c) How many oranges and bananas were sold on Wednesday?

d) How many pieces of fruit were sold on Monday?

e) How many bananas were sold in total? _____

f) How many apples and bananas were sold on Tuesday?

g) How many oranges and apples were sold on Monday?

Worksheet 3

Add the Roman Numerals and write the answer:

	NUMBER			NUMERALS	
1)	XV + VI	=	21	=	XXI
2)	XII + XI	=		=	
3)	XV + XV	=		=	
4)	XI + IX	=		=	
5)	XXV + XI	=		=	
6)	XX + XX	=		=	
7)	XXV + VIII	=		=	
8)	XIV + XI	=		=	
9)	XIX + XII	=		=	
10)	XXX + XII	=		=	
11)	XXXI + XV	=		=	
12)	XXV + IX	=		=	
13)	XIV + IX	=		=	
14)	XX + XXIII	=		=	
15)	XXII + XVI	=		=	
16)	XXXIV + XV	=		=	

Worksheet 4

1. Write the missing number and name the property of addition:

a) $123 + 234 = \underline{\hspace{2cm}} + 123$

Property=_____

b) $4378 + (7896 + 2310) = (\underline{\hspace{2cm}} + 7896) + 2310$

Property=_____

c) $688 + \underline{\hspace{2cm}} = 688$

Property=_____

d) $6907 + \underline{\hspace{2cm}} = 1198 + \underline{\hspace{2cm}}$

Property=_____

e) $0 + 444 =$ _____

Property=_____

f) $1179 + (3875 + \underline{\hspace{2cm}}) = (1179 + 3875) + 9999$

Property=_____

2. Take first 4 odd numbers and make the greatest and smallest number using the digits. Now answer the questions:

a) Greatest Number =

b) Smallest Number =

c) Difference between the ones digits of both numbers =

d) Sum of the hundreds digits of both numbers =

EVS

Worksheet 1

Find the words related to Early Humans in the crossword. Take the help of clue box.

H	I	S	T	O	R	Y	A	H	C
I	Y	D	A	X	P	T	B	L	A
P	R	G	O	V	U	H	E	J	V
S	W	J	U	N	T	P	F	X	E
H	I	S	T	O	R	I	A	N	S
F	M	T	I	M	E	L	I	N	E
K	B	O	T	J	D	Z	J	O	P
M	A	N	U	S	C	R	I	P	T
B	C	E	E	L	W	M	R	K	E
X	Z	L	Q	B	A	S	Q	V	W

Worksheet 2

File History	Timeline
Line Historians	Stone
are Manuscript	Caves

People, _____ and _____ are all examples of living things. Rocks, water and _____ are examples of non living things. All living things _____, breathe, _____, reproduce and excrete or have waste. Some non living things can move but non living things do not _____, breathe, grow or excrete.

Examples of a non living things that move are waterfalls, _____, cars and clouds. Living things reproduce. Animals will have _____ or lay eggs. Humans have babies. Plants reproduce in the form of _____, the seeds will germinate and will become new _____. Some non living things are _____ and some are man made. Can you think of natural and man made non living things? Examples of man made non living things are _____, cars, shoes, bridges and furniture. Examples of natural non living things are _____, the sun, rain, _____, snow and sand. Some non living things are made of material that was once living. Tables and chairs are sometimes made of _____ which was once a living

tree. Everything around us is either _____ or nonliving.

A. bikes B. move C. reproduce D. plants E. plants
F. living G. wood H. animals I. seeds
J. grow K. soil L. fire M. babies N. things
O. rocks

Worksheet 3

Name the activities of the Early Humans given below.



1.



2.



3.



4.

5.



Worksheet 4

Living Things reproduce and have young ones. Collect pictures of any 5 animals and their offsprings from internet or magazines and paste them below.

COMPUTER

WORKSHEET-1

I. Label the parts of the mouse-

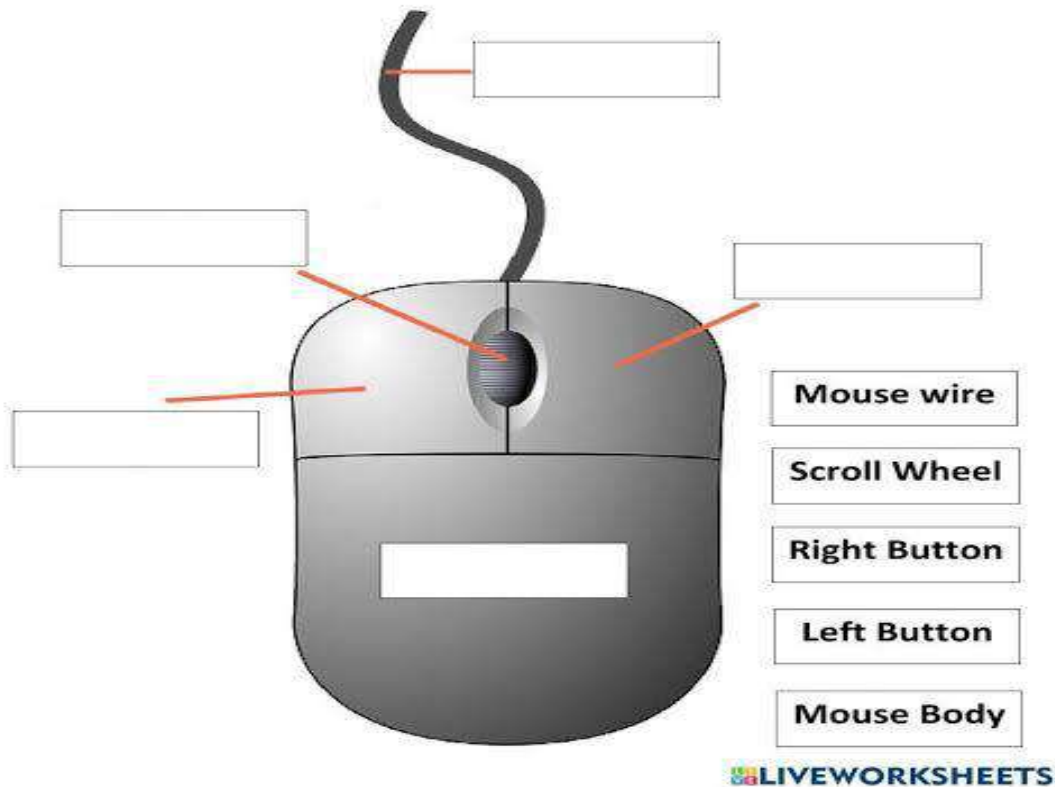


Mouse Parts

Name: _____

Class: _____

Drag and drop the mouse parts.



II. Fill in the blanks-

1. Pressing the left mouse button quickly twice is called _____.
2. Keyboard is a _____ device.
3. Computer follows _____ cycle to work.
4. The work displayed on the monitor screen is called as the _____ copy.
5. CD stands for _____.

Worksheet 2

Write 'I' for Input, 'P' for processing and 'O' for output :-

Write 'I' for input,'O' for Output and 'P' For processing in following



10, 14

$10+14$

$10+14=24$

WORKSHEET-3

Write the names of the following parts of computer-

Write the parts of the computer
using help box

keyboard

cpu

laptop

mouse

speaker

scanner

printer

monitor

pendrive



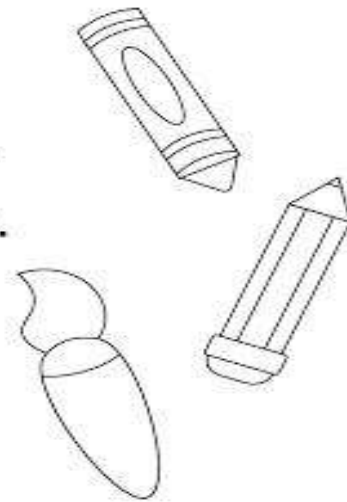
WORKSHEET4

Name: _____ Date: _____

Computer Keyboard Worksheet

Color the keyboard using the guide below.

1. Color all the letter keys purple.
2. Color all the number keys blue.
3. Color the backspace key yellow.
4. Color the enter key green.
5. Color the shift keys orange.
6. Color the space bar key red.



Worksheet-5

Application based questions-

1. Question: Rohan wants to type a letter to his friend. Which device will he use to type the letter?

Answer: _____

2. Question: Aishwarya wants to draw a picture on the computer. Which device will she use to draw?

Answer: _____

3. Question: Karan wants to scan a photo to send it to his grandma. Which device will he use to scan the photo?

Answer: _____

4. Question: Leela wants to print out her favorite story. Which device will she use to print the story?

Answer: _____

5. Question: Arjun wants to listen to his favorite song on the computer. Which device will he use to hear the song?

Answer: _____

6. Question: Sophia wants to see the pictures she took on the computer. Which device will she use to see the pictures?

Answer: _____